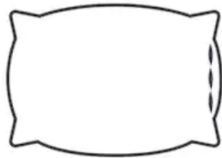


10					
9					
8					
7					
6					
5					
4					
3					
2					
1					



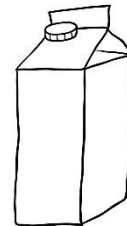
pottar



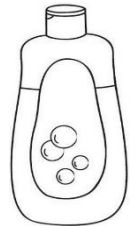
koddar



stólar



fernur



*sápur, sjampó,
næring í brúsum*

Ef það eru fleiri en 10, lita 10 en skrifa réttan fjölda.

Af hverju var mest – minnst – jafnmikið?